

Telling Time

What time is it? Write the time using o'clock or half past.

1)



4)



2)



5)



3)




6)



Telling Time


What time is it? Write the time using o'clock or half past.

1)




Half past 2

4)




Half past 1

2)




Half past 10

5)




Half past 12

3)



Half past 11

6)



Half past 7