

## Telling Time

What time is it? Write the time using o'clock or half past.

1)



4)



2)



5)



3)




6)



## Telling Time


What time is it? Write the time using o'clock or half past.

1)




7 o'clock

4)




2 o'clock

2)




12 o'clock

5)




Half past 4

3)



Half past 10

6)



5 o'clock