

Telling Time

What time is it? Write the time using o'clock or half past.

1)



4)



2)



5)



3)




6)



Telling Time


What time is it? Write the time using o'clock or half past.

1)




1 o'clock

4)




4 o'clock

2)




Half past 4

5)




2 o'clock

3)



9 o'clock

6)



Half past 1