

## Telling Time

What time is it? Write the time using o'clock or half past.

1)




4)



2)




5)



3)




6)



## Telling Time


What time is it? Write the time using o'clock or half past.

1)




Half past 5

4)




1 o'clock

2)




5 o'clock

5)




7 o'clock

3)



Half past 3

6)



12 o'clock