


## Telling Time

What time is it? Write the time using o'clock or half past.

1)




4)



2)



5)



3)




6)



## Telling Time


What time is it? Write the time using o'clock or half past.

1)




Half past 12

4)




6 o'clock

2)




Half past 6

5)




3 o'clock

3)



10 o'clock

6)



Half past 11