

Telling Time

What time is it? Write the time using o'clock.

1)



4)



2)




5)



3)




6)



Telling Time


What time is it? Write the time using o'clock.

1)




12 o'clock

4)




7 o'clock

2)




6 o'clock

5)




11 o'clock

3)



5 o'clock

6)



9 o'clock