

Telling Time

What time is it? Write the time using o'clock.

1)




4)



2)



5)



3)




6)



Telling Time


What time is it? Write the time using o'clock.

1)




5 o'clock

4)




12 o'clock

2)




7 o'clock

5)




6 o'clock

3)



3 o'clock

6)



4 o'clock