

Telling Time

What time is it? Write the time using o'clock.

1)



4)



2)




5)



3)




6)



Telling Time


What time is it? Write the time using o'clock.

1)




8 o'clock

4)




5 o'clock

2)




2 o'clock

5)




7 o'clock

3)



11 o'clock

6)



12 o'clock