

## Telling Time

What time is it? Write the digital times beneath the clocks.

1)



\_\_\_\_\_

4)



\_\_\_\_\_

2)



\_\_\_\_\_

5)



\_\_\_\_\_

3)



\_\_\_\_\_

6)




\_\_\_\_\_

## Telling Time


What time is it? Write the digital times beneath the clocks.

1)




6:00

4)




12:30

2)




1:30

5)




1:00

3)



7:30

6)



10:00