

Telling Time

What time is it? Write the digital times beneath the clocks.

1)



:

4)



:

2)



:

5)



:

3)



:

6)




:

Telling Time


What time is it? Write the digital times beneath the clocks.

1)




6:00

4)




8:00

2)




9:30

5)




11:00

3)



3:00

6)



10:30