

Telling Time


What time is it? Write the digital times beneath the clocks.

1)



_____ : _____

4)



_____ : _____

2)



_____ : _____

5)



_____ : _____

3)



_____ : _____

6)




_____ : _____

Telling Time


What time is it? Write the digital times beneath the clocks.

1)




9:00

4)




3:00

2)




1:00

5)




1:30

3)



12:00

6)



3:30