

Telling Time

What time is it? Write the digital times beneath the clocks.

1)



4)



2)



5)



3)




6)



Telling Time


What time is it? Write the digital times beneath the clocks.

1)




12:30

4)




7:00

2)




6:30

5)




12:00

3)



8:30

6)



2:30