

## Telling Time

What time is it? Write the digital times beneath the clocks.

1)



\_\_\_\_\_ : \_\_\_\_\_

4)



\_\_\_\_\_ : \_\_\_\_\_

2)



\_\_\_\_\_ : \_\_\_\_\_

5)



\_\_\_\_\_ : \_\_\_\_\_

3)



\_\_\_\_\_ : \_\_\_\_\_

6)




\_\_\_\_\_ : \_\_\_\_\_

## Telling Time


What time is it? Write the digital times beneath the clocks.

1)




9:00

4)




2:30

2)




7:30

5)




6:30

3)



2:00

6)



12:00