

Date: _____

SCORE

Name: _____

Counting Money : Nickels

Count and add up all of the coins.


1)  _____ ¢

2)  _____ ¢

3)  _____ ¢

4)  _____ ¢

5)  _____ ¢

6)  _____ ¢

Date: _____

SCORE

Name: _____


Counting Money : Nickels

Count and add up all of the coins.


1)  = 30¢

2)  = 40¢

3)  = 50¢

4)  = 25¢

5)  = 45¢

6)  = 15¢