




Count the dots and find the answer

1)  +  = \_\_\_\_\_



6)  -  = \_\_\_\_\_



2)  -  = \_\_\_\_\_

7)  +  = \_\_\_\_\_


3)  +  = \_\_\_\_\_

8)  -  = \_\_\_\_\_

4)  -  = \_\_\_\_\_

9)  +  = \_\_\_\_\_

5)  +  = \_\_\_\_\_

10)  -  = \_\_\_\_\_